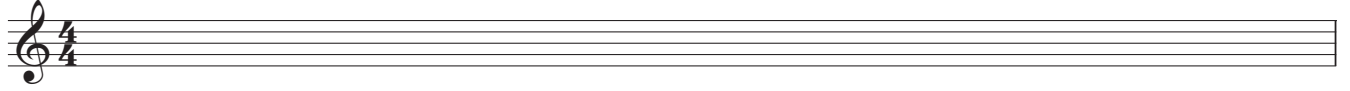



Modes Worksheet 2

1. Write a F Ionian/Major Scale




A musical staff with a treble clef and a 4/4 time signature. The staff is empty, intended for writing the F Ionian/Major Scale.

2. Write a C Aeolian/Minor Scale



A musical staff with a treble clef. The staff is empty, intended for writing the C Aeolian/Minor Scale.


3. Write a Mixolydian Scale in the key of Bb.



A musical staff with a treble clef. The staff is empty, intended for writing the Mixolydian Scale in the key of Bb.

Analyze the following Chord Progressions

4.



A musical staff with a treble clef. The staff is divided into four measures. Above the first measure is the label "C Maj7", above the second is "FMaj7", and above the third is "G7". Each measure contains a single note on the staff. Below the staff are four horizontal lines for analysis.

5.



A musical staff with a treble clef. The staff is divided into four measures. Above the first measure is the label "C-7", above the second is "F7", and above the third is "BbMaj7". Each measure contains a single note on the staff. Below the staff are four horizontal lines for analysis.

6.



A musical staff with a treble clef. The staff is divided into four measures. Above the first measure is the label "B-7", above the second is "E-7", above the third is "A-7", and above the fourth is "GMaj7". Each measure contains a single note on the staff. Below the staff are four horizontal lines for analysis.